

**SET A**

**1. Write Before the Number**

a) \_\_\_ 75

b) \_\_\_ 91

c) \_\_\_ 12

d) \_\_\_ 32

**2. Write After the Number**

a) 30 \_\_\_

b) 79\_\_\_

c) 14 \_\_\_

d) 11 \_\_\_

**3. Skip Counting (Write the Next Number)**

a) 2, 4,6, \_\_\_

b) 5, 10, 15,\_\_\_

c) 1, 3,5, \_\_\_

d) 11, 13,15, \_

**4. Match the number to its name:**

**Number Number Name**

61      Fifty three

80      Eighty

53      Sixty one

**5. Count and Tick (✓) the Correct Answer**



How many lollipops are there?

a) 4

b) 5

c) 6



How many fish are there?

a) 3

b) 4

c) 5



How many apples are there?

a) 3

b) 4

c) 5



How many stars are there?

a) 3

b) 5

c) 4

## 6. Write the Biggest Number

a) 31, 17, 15 → \_\_\_\_\_

b) 92, 24, 26 → \_\_\_\_\_

c) 25, 58, 51 → \_\_\_\_\_

## 7. Write the Smallest Number

a) 06, 20, 90 → \_\_\_\_\_

b) 56, 67, 36 → \_\_\_\_\_

c) 84, 44, 62 → \_\_\_\_\_

## 8. Word Problem

1. Riya has 3 chocolates. Her mother gives her 2 more chocolates.  
How many chocolates does Riya have now? \_\_\_\_\_

2. In a box, there are **3 apples**.  
Mother puts **2 more apples** in the box.  
How many apples are there now? \_\_\_\_\_

3. Tina has **6 crayons**.  
She gives **1 crayon** to her friend.  
How many crayons does Tina have now? \_\_\_\_\_

4. A plate has **8 biscuits**.  
**4 biscuits** are eaten.  
How many biscuits are left? \_\_\_\_\_

**SET B**

**1. Count and Write**

a)  = \_\_\_\_\_

b)  = \_\_\_\_\_

c)  = \_\_\_\_\_

**2. Fill in the Missing Numbers**

a) 12, 13, \_\_, 15

b) 6, \_\_, 8, 9

c) \_\_, 12, 13

d) 51, 52, 53, \_\_, \_\_

**3. Write the Number Name**

a) 41 → \_\_\_\_\_

b) 73 → \_\_\_\_\_

c) 101 → \_\_\_\_\_

d) 333 → \_\_\_\_\_

**4. Add**

a)  $21 + 3 =$  \_\_\_\_\_

b)  $5 + 11 =$  \_\_\_\_\_

c)  $4 + 12 =$  \_\_\_\_\_

d)  $5 + 15 =$  \_\_\_\_\_

**5. Subtract**

a)  $15 - 12 =$  \_\_\_\_\_

b)  $16 - 13 =$  \_\_\_\_\_

c)  $14 - 11 =$  \_\_\_\_\_

d)  $20 - 5 =$  \_\_\_\_\_

**6. Greater ( > ) or Smaller ( < )**

a) 15 \_\_\_\_\_ 31

b) 21 \_\_\_\_\_ 16

c) 71 \_\_\_\_\_ 17

d) 15 \_\_\_\_\_ 51

**7. Circle the Even Number**

a) 3, 4, 5

b) 2, 5, 7


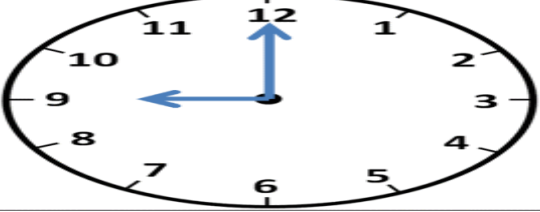
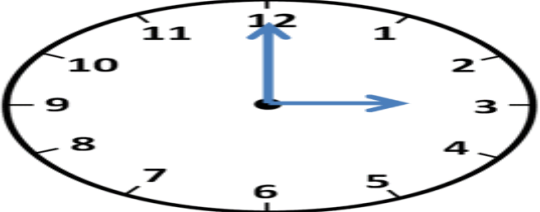
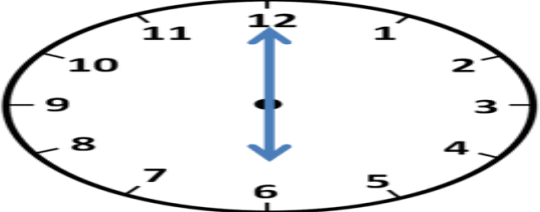
c) 9, 6, 3

d) 7, 9, 6

8. Draw and Count:- Draw 5 flowers and write the number: \_\_\_\_\_



9. Write the time

 _____ o'clock	 _____ o'clock
 _____ o'clock	 _____ o'clock

